
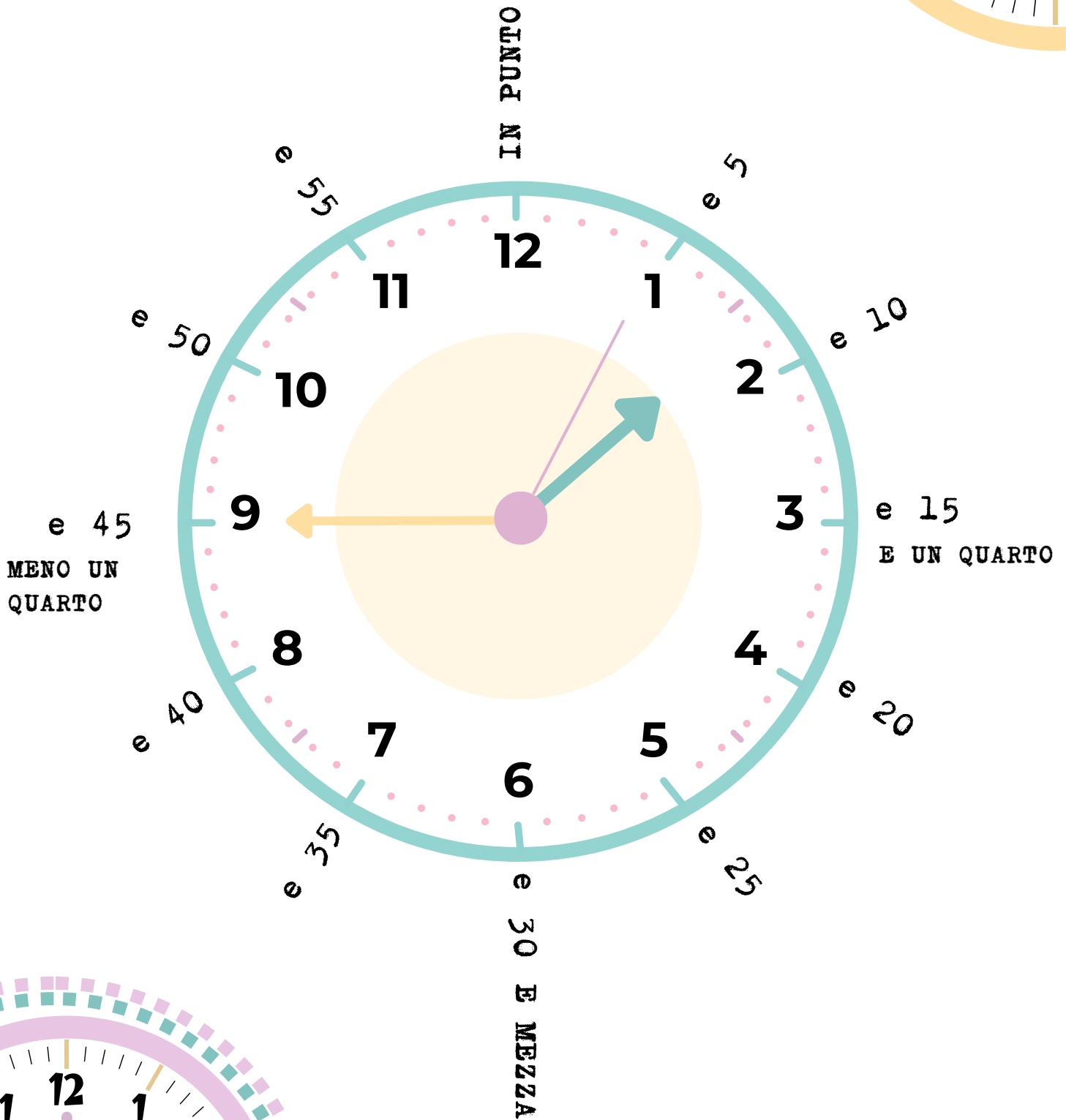
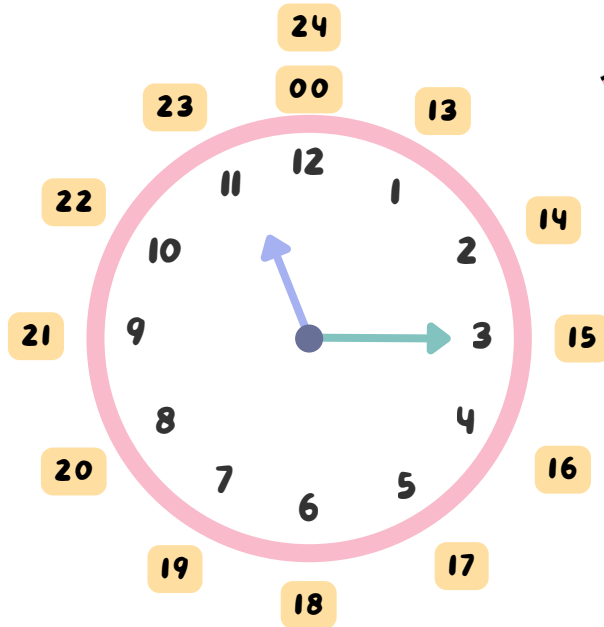


# IMPARIAMO A LEGGERE L'ORA



# GIOCHIAMO A LEGGERE L'ORA

## L'OROLOGIO



IN UNA GIORNATA CI SONO 24 ORE, MA ALL'INTERNO DEL QUADRANTE CI SONO SOLO 12 ORE.

LE ORE CHE VANNO DA 00 A 12 RAPPRESENTANO LE ORE DELLA NOTTE E DELLA MATTINA. QUELLE DA 13 A 24 QUELLE DEL POMERIGGIO E DELLA SERA

## ATTIVITÀ

1 COLLEGA LE ORE ESPRESSE IN NUMERO CON QUELLE IN LETTERE

LE QUINDICI

10:00

LE DIECI DEL MATTINO

12:15

LE TREDICI E TRENTA

17:00

LE DODICI E UN QUARTO

21:30

LE DICIASSETTE

15:00

LE VENTUNO E TRENTA

13:30

2

PER OGNI ORA ESPRESSA IN CIFRE SCRIVI L'ORARIO CORRISPONDENTE, COME NELL'ESEMPIO

06:45

LE SEI E QUARANTACINQUE

11:15

04:15

11:30

09:15

04:30

3

INDICA LA RISPOSTA CORRETTA

SONO LE NOVE E QUARANTACINQUE

08:45 07:45 09:45 


SONO LE TRE E TRENTA

04:30 03:30 18:30 



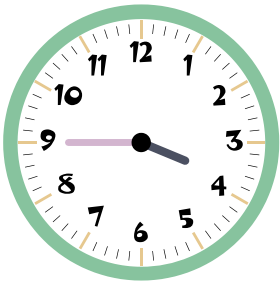
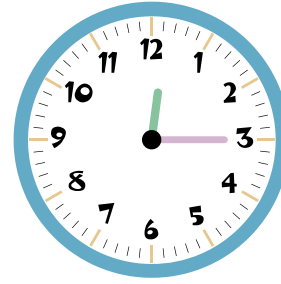

SONO LE QUATTRO E UN QUARTO

04:15 17:15 05:15

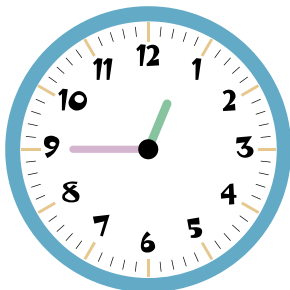
4 PER OGNI OROLOGIO INDICA L'ORARIO IN CIFRE, COME NELL'ESEMPIO



13:45



5 INDICA L'ORA CORRETTA





LE DODICI E QUARANTACINQUE

LA UNA E QUARANTACINQUE

LE QUINDICI E TRE

LE QUINDICI E QUINDICI




LE 9 E QUARANTACINQUE

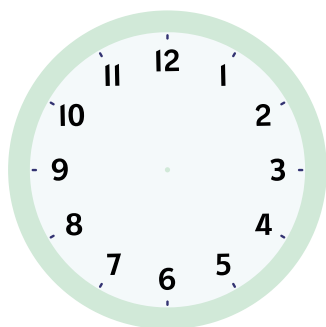
LE 10 E QUARANTACINQUE

6

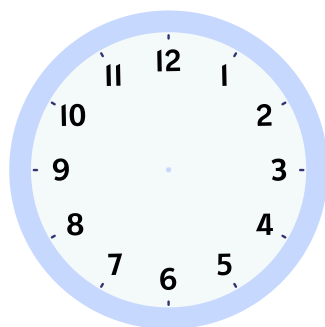
SEGNA SU OGNI OROLOGIO L'ORA CORRETTA, COME NELL'ESEMPIO



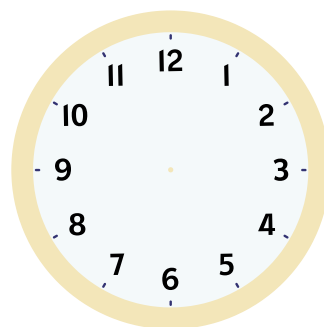
17:00



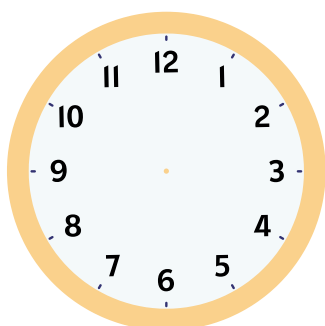
09:20



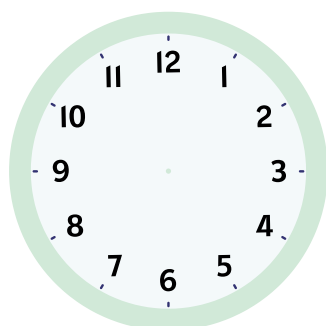
12:00



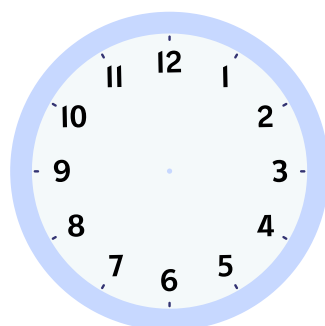
04:15




19:45



08:40




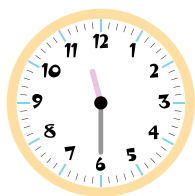


02:55



22:30

7

COLLEGA GLI OROLOGI TRA LORO



01:30

11:30

01:00

16:00

06:30

05:00

8 **RISPONDI ALLE DOMANDE**

SE UN'ORA HA 60 MINUTI, QUANTI MINUTI CI SONO IN 2 ORE?

IN UN GIORNO CI SONO 24 ORE, QUANTE ORE CI SONO IN MEZZA GIORNATA?

QUANTI SECONDI CI SONO IN 1 ORA?

SE IN UN'ORA CI SONO 60 SECONDI, QUANTI SECONDI CI SONO IN 3 ORE?