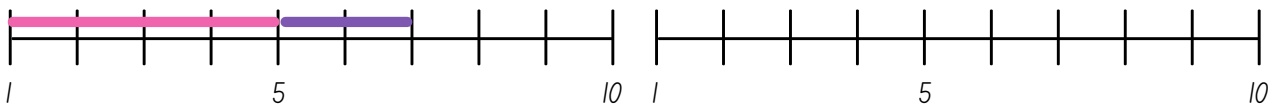


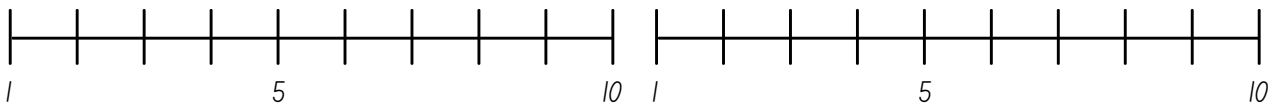
# LA LINEA DEI NUMERI

AIUTATI CON LA LINEA DEI NUMERI PER SVOLGERE LE OPERAZIONI



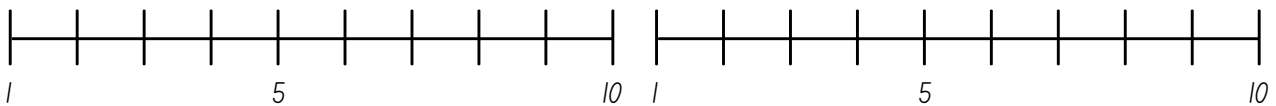
$$5 + 2 = \bigcirc 7$$

$$6 + 3 = \bigcirc$$



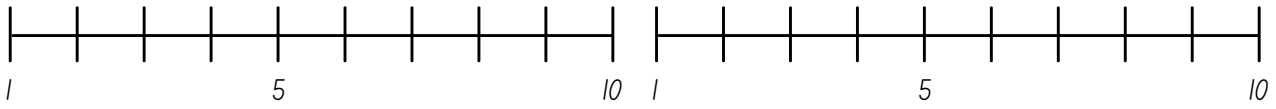
$$3 + 2 = \bigcirc$$

$$5 + 4 = \bigcirc$$



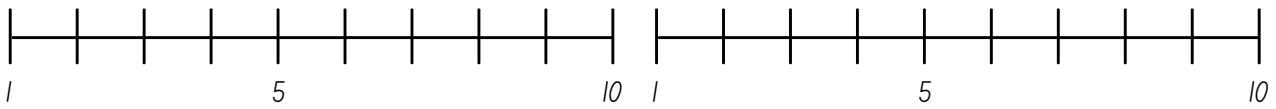
$$1 + 4 = \bigcirc$$

$$4 + 2 = \bigcirc$$



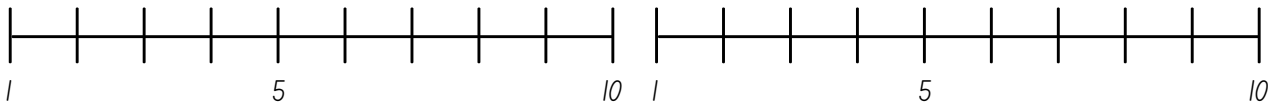
$$4 + 4 = \bigcirc$$

$$3 + 7 = \bigcirc$$



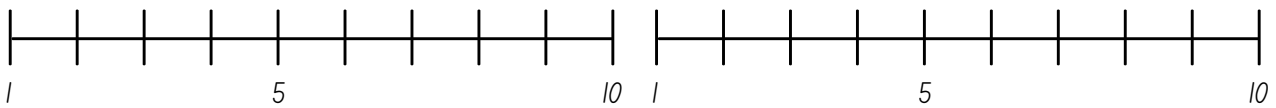
$$2 + 2 = \bigcirc$$

$$4 + 6 = \bigcirc$$



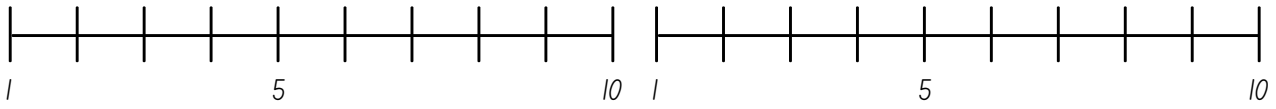
$$5 + 1 = \bigcirc$$

$$2 + 7 = \bigcirc$$



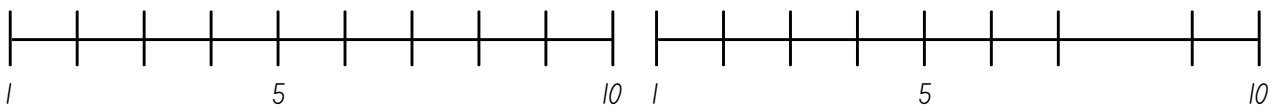
$$1 + 2 = \bigcirc$$

$$7 + 1 = \bigcirc$$



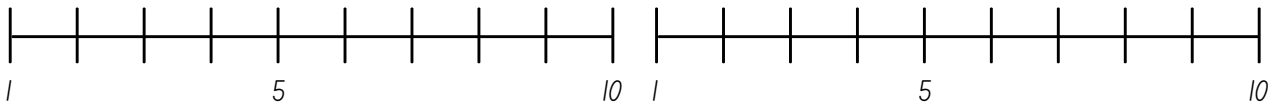
$$4 + 3 = \bigcirc$$

$$1 + 6 = \bigcirc$$



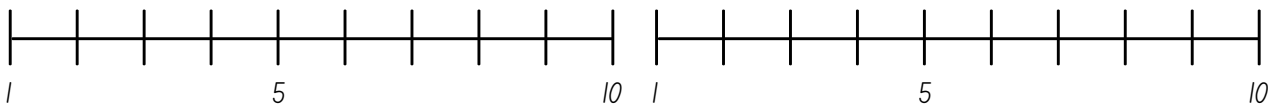
$$3 + 4 = \bigcirc$$

$$9 + 0 = \bigcirc$$



$$6 + 2 = \bigcirc$$

$$2 + 4 = \bigcirc$$



$$8 + 0 = \bigcirc$$

$$8 + 2 = \bigcirc$$